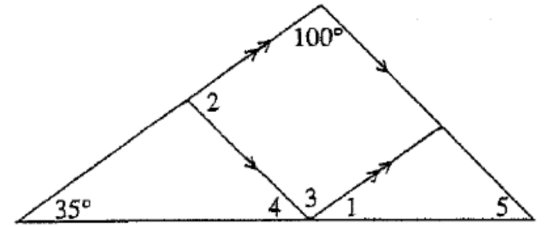


Assignment

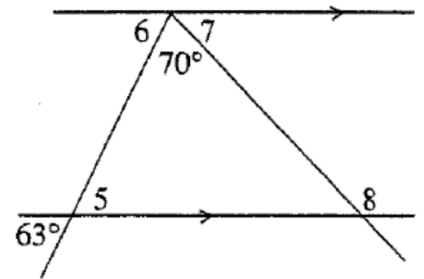
Name: _____

Date: _____

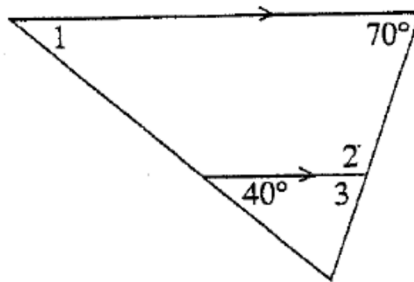
- Find the measure of angles 1, 2, 3, 4 and 5 in the diagram. Justify each answer.



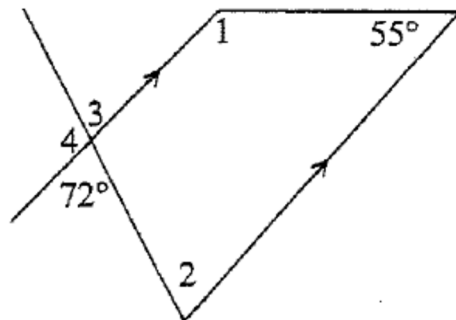
- Find the measure of angles 5, 6, 7 and 8 in the diagram. Justify each answer.



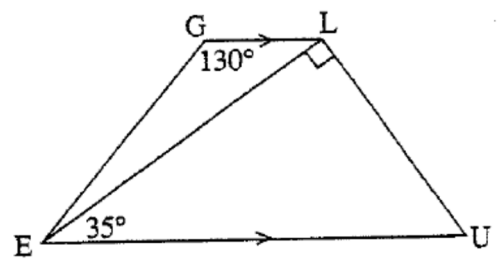
- Find the measure of angles 1, 2 and 3. Justify each step.



- Find the measure of angles 1, 2, 3 and 4. Justify each step.

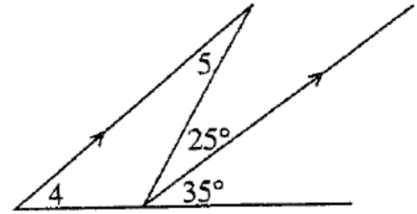


- Find the measure of all the missing angles in the diagram. Justify each step.

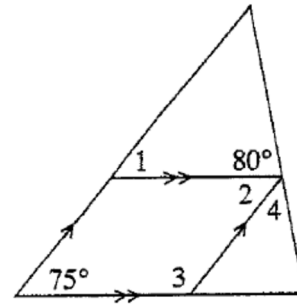


Assignment

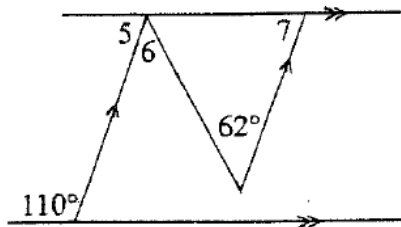
5. Find the measure of angles 4 and 5. Justify each step.



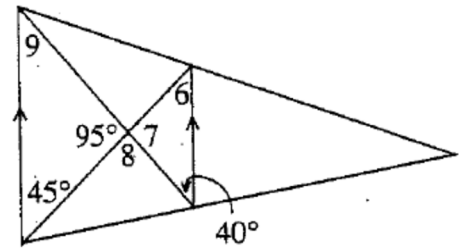
6. Find the measure of angles 1, 2, 3 and 4. Justify each step.



7. Find the measures of angles 5, 6 and 7. Justify each step.



8. Find the measure of angles 6, 7, 8 and 9. Justify each step.



9. Find the measure of angles 1, 2, 3 and 4. Justify each step.

