

Name: _____

Date: _____

Learning Goal 1.1

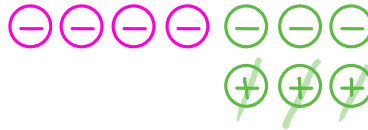
I can add and subtract integers.

1. Find the sum of the following integers using counters to model the questions.

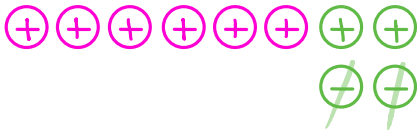
a. $5 - 3 = 2$



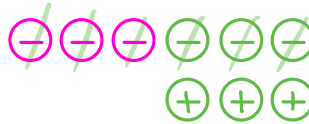
b. $(-4) - 3 = -7$



c. $6 - (-2) = 8$



d. $(-3) - (-6) = 3$



2. Find the sum of the following integers without modelling the questions.

a. $7 - 4 = 3$

b. $(-9) - 12 = -21$

c. $3 - (-15) = 18$

d. $(-17) - (-3) = -14$

e. $16 - 11 = 5$

f. $(-14) - 10 = -24$

g. $10 - (-1) = 11$

h. $(-26) - (-6) = -20$

i. $18 - 19 = -1$

j. $(-32) - 23 = -55$

k. $15 - (-15) = 30$

l. $(-24) - (-3) = -21$

m. $45 - 45 = 0$

n. $(-35) - 12 = -47$

o. $1 - (-21) = 22$

p. $(-14) - (-3) = -11$