

Name: _____

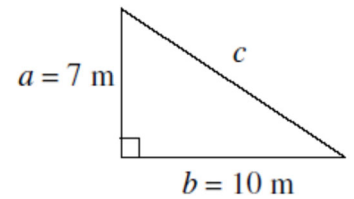
Date: _____

Learning Goal 7.2

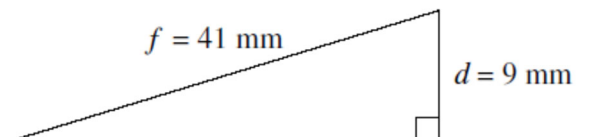
I can find missing sides or identify right triangles using the Pythagorean Theorem.

The Pythagorean Theorem

Example Determine the length of the **hypotenuse, c**, of following right triangle. Express your answer to the nearest tenth of a metre.

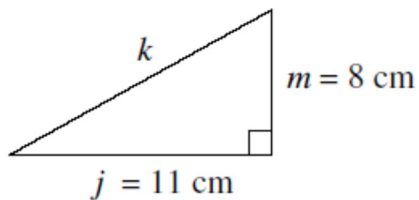


Example Determine the length of the **leg, e**, of the right triangle. Express your answer to the nearest millimeter.

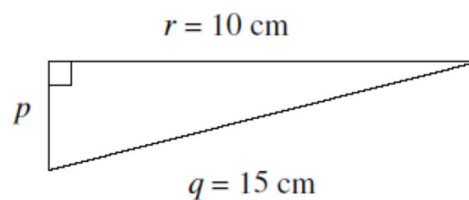


Example Find the missing side length to the nearest tenth.

a.



b.



Example Jeremy's brand-new big screen TV measures 40" by 25". What is the length of the diagonal of the TV? Express your answer to the nearest tenth of an inch.