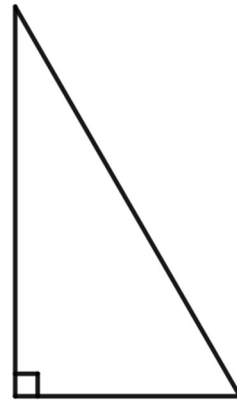
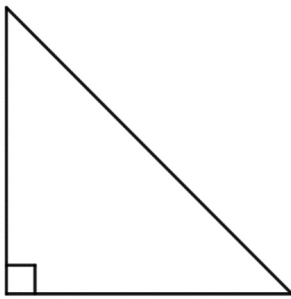
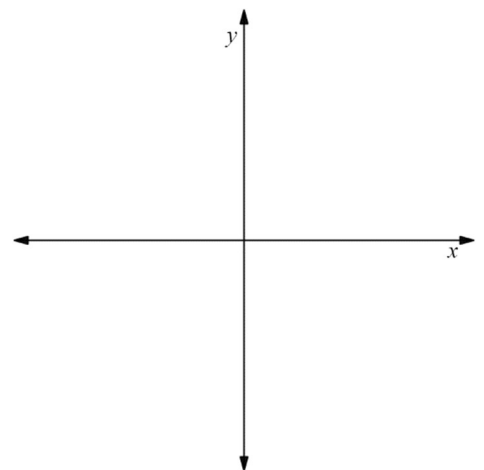


Name: _____

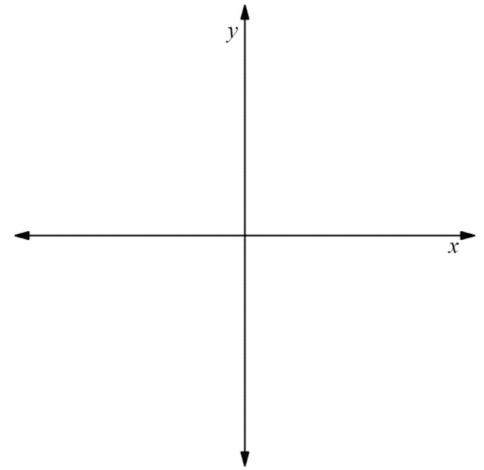
Date: _____

Learning Goal 2.2

Using trigonometric ratios and solving simple trigonometric equations.

Special Angle Triangles**Example** Determine the exact value of $\cos 135^\circ$ 

Example Determine the exact values of the sine, cosine and tangent ratios for 300°



Example Solve for θ .

a. $\sin \theta = 0.5, \quad 0^\circ \leq \theta < 360^\circ$

b. $\sin \theta = -\sqrt{3}/2, \quad -180^\circ \leq \theta < 180^\circ$